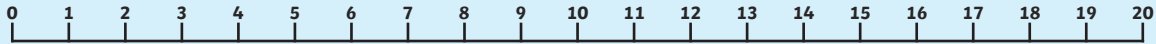


# Back to School Subtraction up to 20

Write down the answers in the circles.

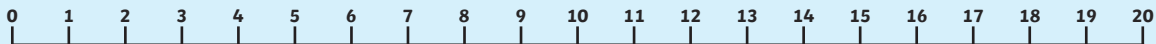
$$20 - 6 = \bigcirc$$



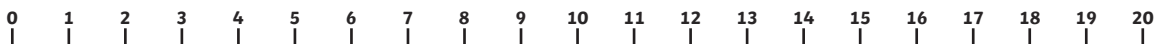
$$17 - 9 = \bigcirc$$



$$14 - 6 = \bigcirc$$



$$16 - 5 = \bigcirc$$



$$19 - 6 = \bigcirc$$

